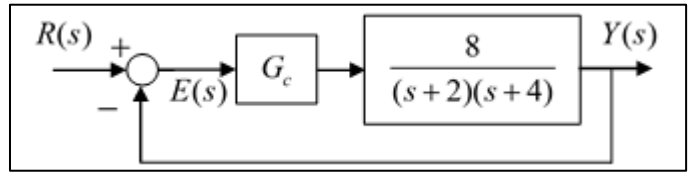


ME 4710 Motion and Control

Exercises #4 Phase-lead Compensator Design Using Bode Diagrams

1. The block diagram shows a second-order system that is to be controlled by a phase-lead compensator $G_c(s)$. a) Assuming $G_c(s) = K$, find the range of K values required to make e_{ss} the steady state error due

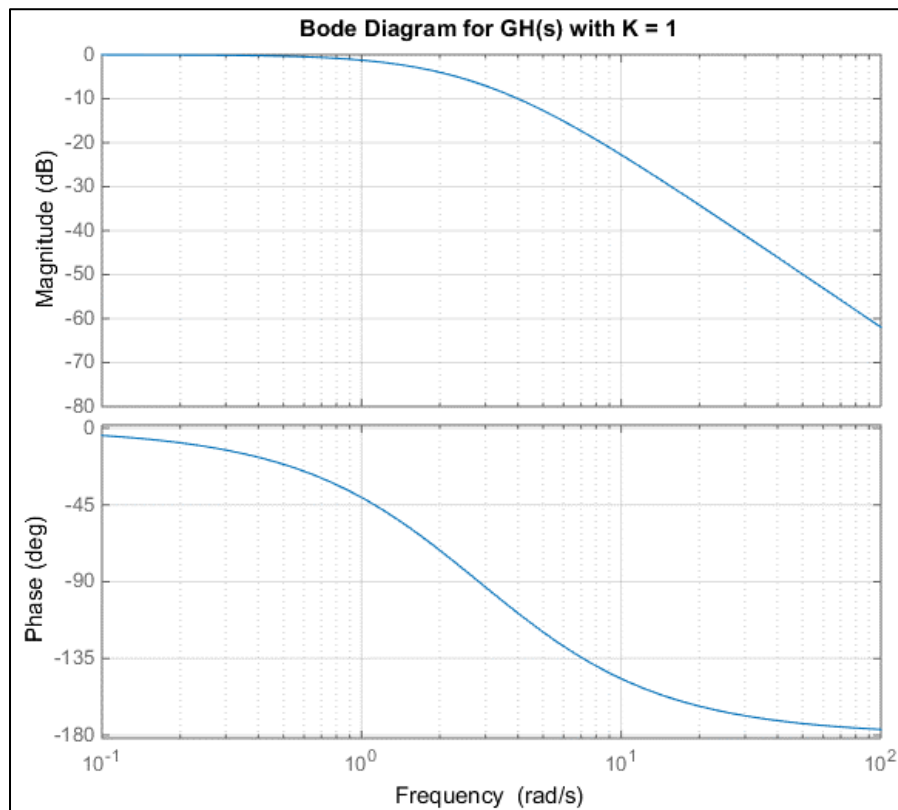


to a unit step input less than 0.01. b) Estimate PM the phase margin of the system using a K value that satisfies the condition of part (a). The Bode diagram of $GH(s)$ with $G_c(s) = K = 1$ is shown below. c) Design a phase-lead compensator that will increase the phase margin of the system by 30 (deg).

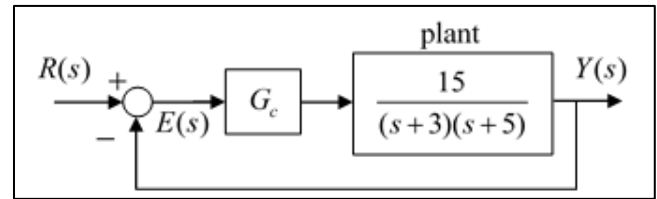
Answers:

a) $K > 99$; b) Using diagram with $K = 100$, $PM \approx 15$ (deg); c) $G_c(s) \approx 300 \left[\frac{s + 23.09}{s + 69.28} \right]$

Note: The actual phase margin for $K = 100$ is approximately 12 degrees. The estimated compensated system yields a phase margin of 39.4 degrees. Need further iteration to achieve desired phase margin increase.



2. The block diagram shows a second-order system to be controlled by a phase-lead compensator $G_c(s)$.



a) Assuming $G_c(s) = K$, find the range of K values required to make e_{ss} the steady state error due to a unit

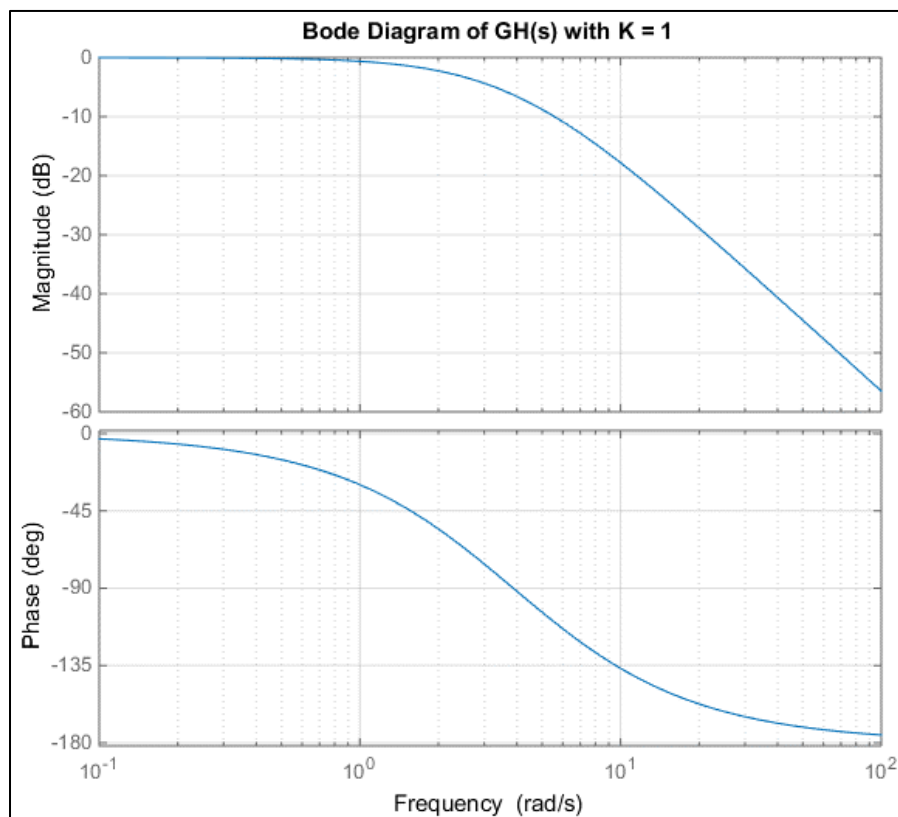
step input less than 0.04. b) Estimate PM the phase margin of the system using a K value that satisfies the condition of part (a). The Bode diagram of $GH(s)$ with $G_c(s) = K = 1$ is shown below. c) Design a phase lead compensator that will increase the phase margin of the system by 30 (deg). d) Sketch a root locus diagram for the closed loop system using the compensator you designed in part (c). Estimate the settling time of the closed loop system to a step input for large values of K .

Answers:

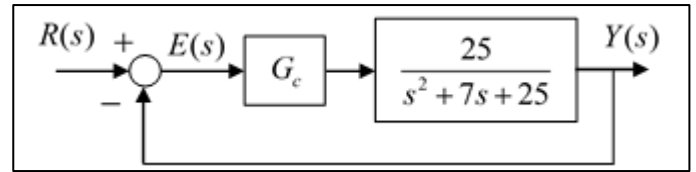
a) $K > 24$; b) Using the diagram with $K = 30$, $PM \approx 23$ (deg); c) $G_c(s) \approx 90 \left[\frac{s+17.32}{s+51.96} \right]$

d) For large values of K , there will be a near-pole zero cancellation with two under-damped poles approaching vertical asymptotes at $s = -21.34$. The settling time of these poles is $T_s \approx 0.19$ (sec).

Note: The actual phase margin with $K = 30$ is approximately 22 degrees. The estimated compensated system yields a phase margin of 46.8 degrees. Need further iteration to achieve desired phase margin increase.



3. The block diagram shows an under-damped second order system to be controlled by a phase-lead compensator $G_c(s)$. a) Assuming $G_c(s) = K$, find the range of K values required to make e_{ss} the steady state error due to a unit step input less than 0.06.



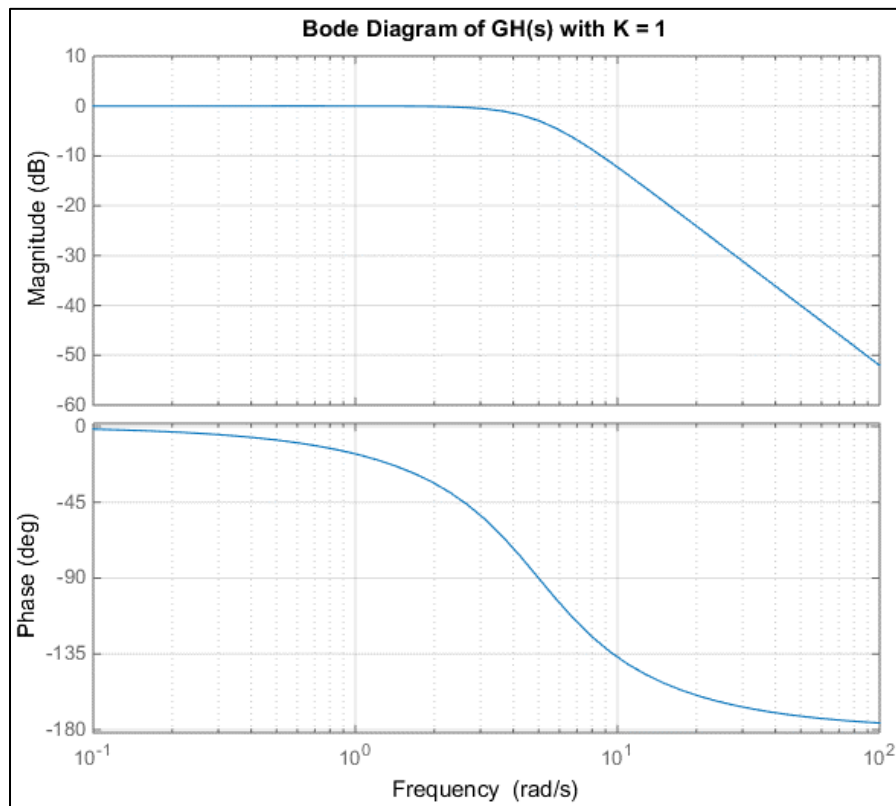
b) Estimate PM the phase margin of the system using a K value that satisfies the condition of part (a). The Bode diagram of $GH(s)$ with $G_c(s) = K = 1$ is shown below. c) Using the Bode diagram, design a phase lead compensator that will increase the phase margin of the system by 30 (deg). Use a gain K that will satisfy the condition of part (a). d) Sketch a root locus diagram for the closed loop system using the compensator you designed in part (c). Estimate the settling time of the closed loop system to a step input for large K values.

Answers:

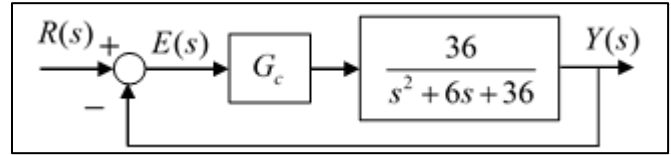
a) $e_{ss} = \frac{1}{K+1}$ and $K > 15.7$; b) Using $K = 17$, $PM \approx 20$ (deg); c) $G_c(s) \approx 17(3) \left[\frac{s+15.6}{s+46.8} \right]$

d) For large values of K , there will be a near-pole zero cancellation with two under-damped poles approaching vertical asymptotes at $\sigma_A = -19.1$, so the settling time approaches $T_s \approx 4/19.1 = 0.21$ (s).

Note: The actual phase margin with $K = 17$ is approximately 19.8 degrees. The estimated compensated system yields a phase margin of 44.9 degrees. Need further iteration to achieve desired phase margin increase.



4. The block diagram shows a second order system to be controlled by a phase-lead compensator $G_c(s)$.



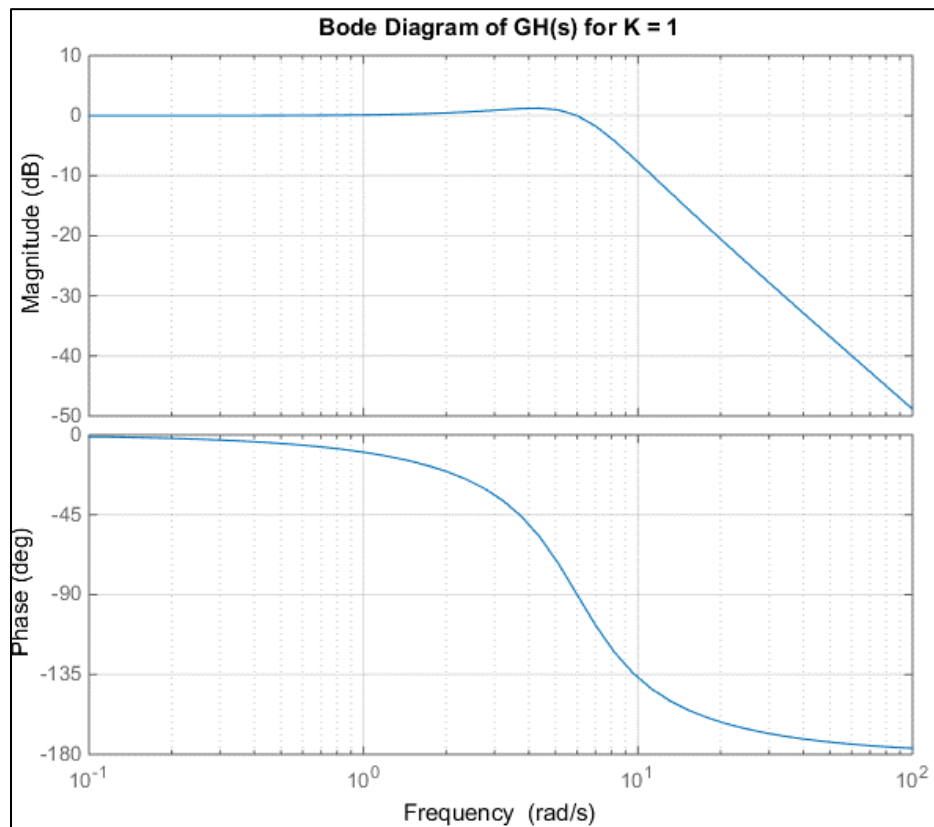
a) Assuming $G_c(s) = K$, find the range of K values

required to make e_{ss} the steady state error due to a unit step input less than or equal to 0.1. b) Estimate PM the phase margin of the system using a K value that satisfies the condition of part (a). The Bode diagram of $GH(s)$ with $G_c(s) = K = 1$ is shown below. c) Using the Bode diagram, design a phase lead compensator that will increase the phase margin of the system by 32 (deg). Use a gain K that will satisfy the condition of part (a).

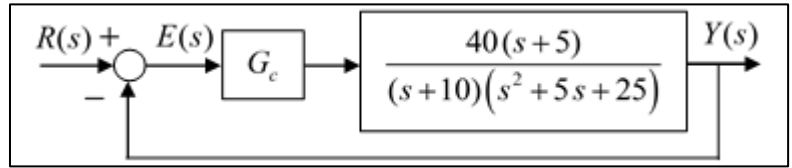
Answers:

a) $K \geq 9$; b) Using $K = 10$, $PM \approx 20$ (deg); c) $G_c(s) = 10(3.255) \left[\frac{s + 13.86}{s + 45.1} \right]$

Note: The actual phase margin with $K = 10$ is approximately 18.9 degrees. The estimated compensated system yields a phase margin of 45.6 degrees. Need further iteration to achieve desired phase margin increase.



5. The block diagram shows a third order system to be controlled by a phase-lead compensator $G_c(s)$. a) Assuming $G_c(s) = K$, find the range of K values required to make e_{ss} the steady state error due to a unit step input less than 0.05. b) Estimate PM the phase margin of the system using a K value that satisfies the condition of part (a). The Bode diagram of $GH(s)$ with $G_c(s) = K = 1$ is shown below. c) Using the Bode diagram, design a phase lead compensator that will increase the phase margin of the system by 30 (deg). Use a gain K that will satisfy the condition of part (a).



of K values required to make e_{ss} the steady state error due to a unit step input less than 0.05. b) Estimate PM the phase margin of the system using a K value that satisfies the condition of part (a). The Bode diagram of $GH(s)$ with $G_c(s) = K = 1$ is shown below. c) Using the Bode diagram, design a phase lead compensator that will increase the phase margin of the system by 30 (deg). Use a gain K that will satisfy the condition of part (a).

Answers:

a) $K \geq 23.75$; b) Using $K = 25$, $PM \approx 18$ (deg); c) $G_c(s) = 25(3) \left[\frac{s + 24.25}{s + 72.75} \right]$

Note: The actual phase margin with $K = 25$ is approximately 18 degrees. The estimated compensated system yields a phase margin of 43.8 degrees. Need further iteration to achieve desired phase margin increase.

